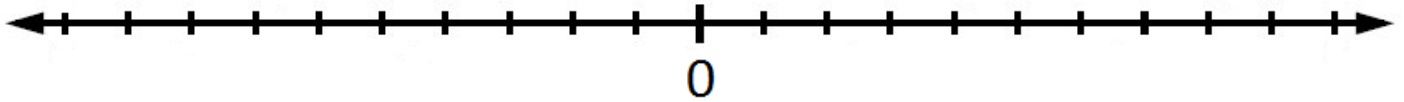


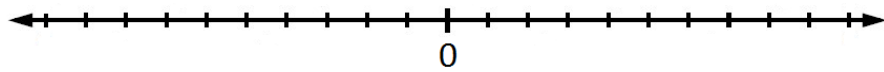
## Наставен лист 1

1. Подреди ги броевите 1, -4, 6, -8, 4, 5, -6, -7, -1, 2, -3, 7, 3, -10 на бројната права:

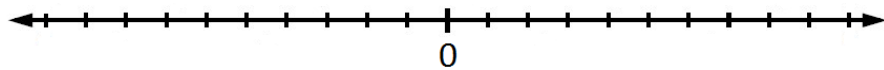


2. Пресметај користејќи бројна права:

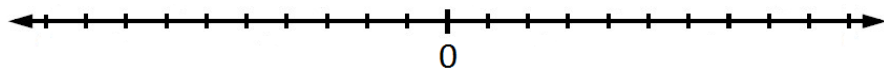
а)  $4 + (-6) =$  \_\_\_\_\_



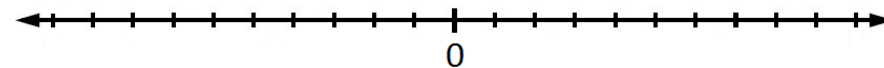
б)  $5 + (-3) =$  \_\_\_\_\_



в)  $3 - (-6) =$  \_\_\_\_\_



г)  $4 - (-5) =$  \_\_\_\_\_



3. Пресметај

а)  $(+5) + (-3) =$

б)  $(-7) + (+9) =$

в)  $(-10) + (-17) =$

г)  $(+13) + (+12) =$

д)  $(8) - (-6) =$

ѓ)  $+6 + 3 =$

е)  $-10 - 4 =$

ж)  $-6 - 8 =$

з)  $+1 - 8 =$

ц)  $-2 + 4 =$