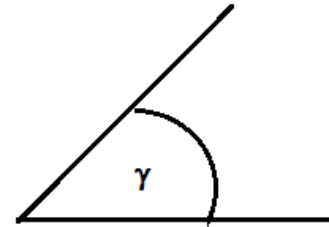
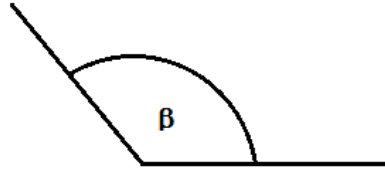
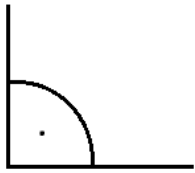



Работна задача 1: Определи каков тип на агли се дадените агли според нивната големина:



Некои видови агли кои се формираат при одржување на олимписките игри



Работна задача 2:

а) Со што се мери агол? _____.

в) Агол помал од 90° се вика _____.

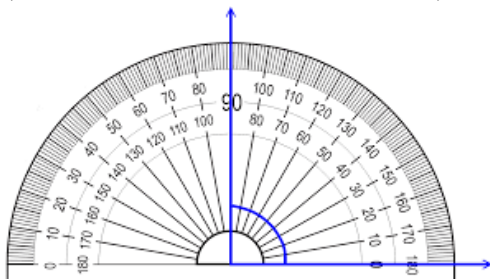
д) Агол кој има 180° се вика _____.

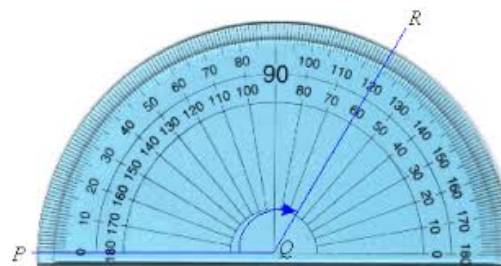
е) Која е големината на аглиите што ја покажуваат дадените агломери:

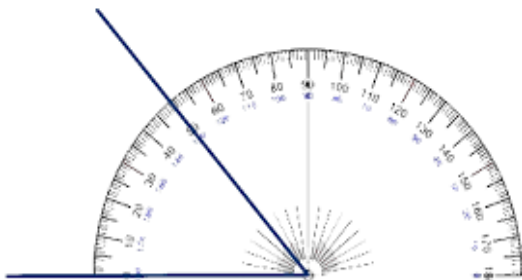
б) Агол од 90° се вика _____.

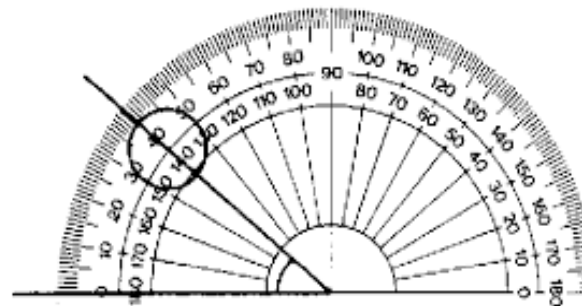
г) Агол поголем од 90° се вика _____.

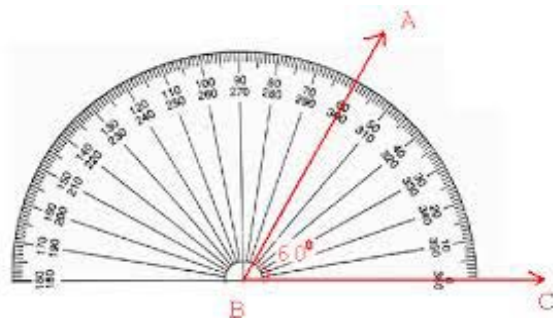
ѓ) Агол кој има 360° се вика _____.





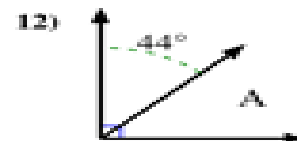
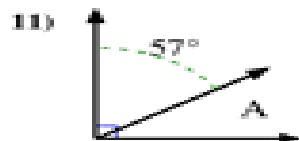
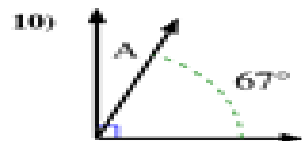
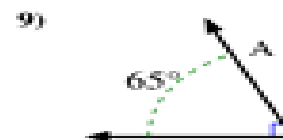
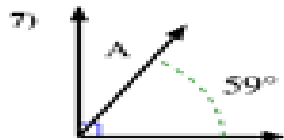
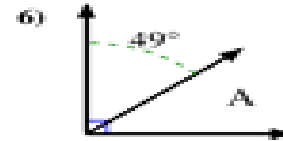
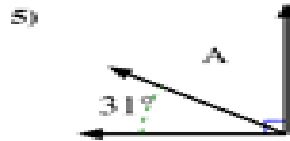
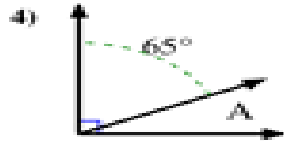
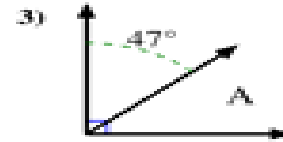
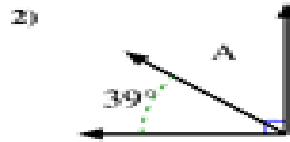
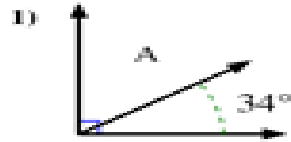








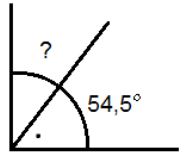
Работна задача 3: Пресметај го непознатиот агол на цртежите и запиши го твојот одговор после бројот на задачата.



- 1. _____
- 2. _____
- 3. _____
- 4. _____
- 5. _____
- 6. _____
- 7. _____
- 8. _____
- 9. _____
- 10. _____
- 11. _____
- 12. _____

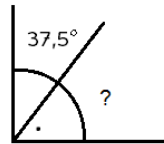
Работна задача 4: Пресметај го непознатиот агол на цртежите и запиши го твојот одговор после бројот на задачата.

1.



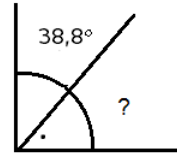
агол

2.



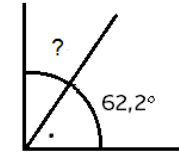
агол

3.



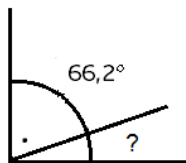
агол

4.



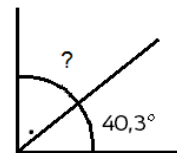
агол

5.



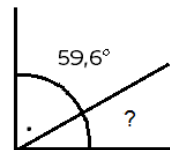
агол

6.



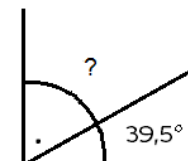
агол

7.



агол

8.



агол
