

# МЕРЕЊЕ ВРЕМЕ

Наставен лист

1. Прочитај и запиши го времето што го покажуваат аналогните часовници.



:



:




:



:



:




:



:



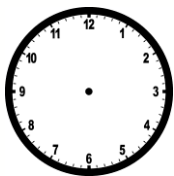
:



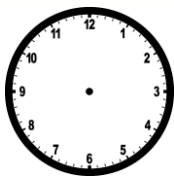
:

2. Запиши ги дадените времиња во празните часовници.

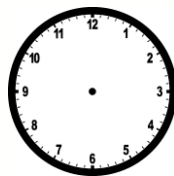
а) 12:30



б) 17:00




в) 23:30




# МЕРЕЊЕ ВРЕМЕ

Наставен лист


1. Прочитај и запиши го времето што го покажуваат аналогните часовници.



:




:




:




:



:




:



:



:



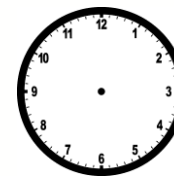
:

2. Запиши ги дадените времиња во празните часовници.

а) 12:30



б) 17:00



в) 23:30

