


Датум: _____

Име и презиме: _____



ДОМИНО

Изброј ги точките на секоја домино плочка. Колкав е збирот на секоја од плочките?



Со линии поврзи ги домино плочките со бројот што одговара на збирот на точки.





5




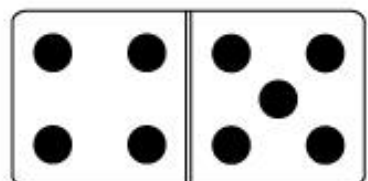
6



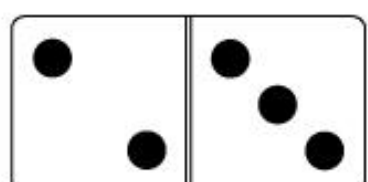
7



8



9



10