


Датум: _____

Име и презиме: _____


ДОМИНО: Да направиме 10

На колку сè начини може да се добие 10?


Доцртај го потребниот број на точки на празната половина, а потоа претстави го равенството под секое домино.




$$4 + \underline{\quad} = 10$$



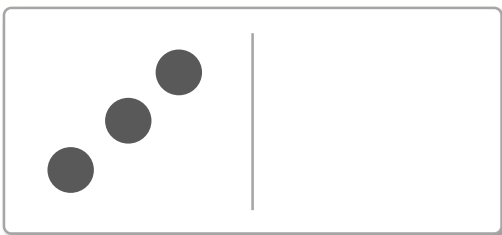
$$2 + \underline{\quad} = 10$$




$$5 + \underline{\quad} = 10$$



$$1 + \underline{\quad} = 10$$



$$3 + \underline{\quad} = 10$$



$$6 + \underline{\quad} = 10$$